

Number of Pages: 24
पृष्ठों की संख्या : 24

ETC - I

Q. P. B. Series

D

Question Paper Booklet No.
(प्रश्न-पत्र पुस्तिका क्रमांक)

Roll No. (In Figures)

अनुक्रमांक (अंकों में)

O.M.R. Answer Sheet No.

(ओ.एम.आर. उत्तर पत्रक क्रमांक)

पारी : I

Shift : I

समय : तीन घण्टे

Time : Three Hours

पूर्णांक : 600

Maximum Marks : 600



EETYTEC - 26

महत्त्वपूर्ण अनुदेश :-

1. प्रश्न-पत्र पुस्तिका में निर्देशों सहित कुल 24 पृष्ठ हैं। इस पुस्तिका में प्रश्न संख्या 1 से प्रश्न संख्या 200 तक कुल दो सौ प्रश्न मुद्रित हैं। प्रश्न-पत्र पुस्तिका के प्रत्येक भाग-अ, ब, स एवं द में 50 प्रश्न हैं। 'भाग-द' के दो भाग हैं। इसमें प्रश्न संख्या 151 से प्रश्न संख्या 170 तक अंग्रेजी के हैं, जो सभी के लिए अनिवार्य हैं। प्रश्न संख्या 171 से प्रश्न संख्या 200 तक के लिए अभ्यर्थी को हिन्दी या संस्कृत में से किसी एक का चयन करना है। प्रश्न-पत्र पुस्तिका के सम्बन्ध में किसी भी शिकायत पर परीक्षा प्रारम्भ होने के 10 मिनट के भीतर ही विचार किया जायेगा।
2. संस्कृत में प्रवेश चाहने वाले 'भाग-द' में संस्कृत का ही चयन करें। संस्कृत तथा सामान्य दोनों का चयन करने वाले भी संस्कृत विषय का ही चयन करें।
3. प्रश्नों के उत्तर देने के लिए ओ.एम.आर. उत्तर-पत्रक के पृष्ठ भाग पर दिये गये निर्देशों का पालन करें।
4. **परीक्षार्थी इस प्रश्न-पत्र पुस्तिका का क्रमांक एवं सीरीज ओ.एम.आर. उत्तर-पत्रक में निर्धारित स्थानों पर अवश्य भरें, अन्यथा उसका परीक्षा परिणाम घोषित नहीं हो सकेगा और उसके लिए वह स्वयं उत्तरदायी होगा।**

नोट :-

1. सभी प्रश्न अनिवार्य हैं।
2. भाग अ, ब, स एवं द के प्रत्येक प्रश्न के लिए 3 अंक निर्धारित हैं।
3. नकारात्मक अंकन नहीं होगा।
4. **ओ.एम.आर. उत्तर पत्रक में उत्तर अंकित करने और वांछित सूचना अंकित करने के लिए काला/नीला बॉल पॉइन्ट पेन ही इस्तेमाल करें।**

Important Instructions:-

1. The Question Paper Booklet (Q.P.B.) contains a total number of 24 pages including instructions. There are 200 questions in all from question no. 1 to question no. 200 printed in this booklet. There are 50 questions in each Section - A, B, C & D of Q.P.B. 'Section-D' has two parts in it. In this Section question no. 151 to 170 are of English and compulsory for all. For question no. 171 to 200 candidate has to select either Hindi or Sanskrit. Any complaint regarding the Question Paper Booklet will be entertained within 10 minutes from the commencement of the Exam.
2. Candidates seeking admission in Sanskrit have to opt Sanskrit in 'Section-D'. The candidates who have applied for both Sanskrit and General will also opt Sanskrit only.
3. Follow the Instructions given at the back of O.M.R. Answer Sheet for answering questions.
4. **The candidate should fill in the serial no. and series of this Question Paper Booklet in the O.M.R. Answer Sheet at the proper places, otherwise his/her result will not be declared and only he/she will be liable for that.**

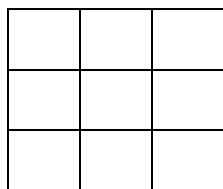
NOTE:-

1. All questions are compulsory.
2. Each question carries 3 marks in Section A, B, C & D.
3. No negative marking will be there.
4. **Use Black/Blue ball point pen only to answer questions and to fill in information required in the O.M.R. Answer Sheet.**

उत्तर-पत्रक में दो प्रतियाँ हैं - मूल प्रति और कार्बन प्रति। परीक्षा समाप्ति पर परीक्षा कक्ष छोड़ने से पूर्व परीक्षार्थी उत्तर-पत्रक की दोनों प्रतियाँ वीक्षक को सौंपेंगे, परीक्षार्थी स्वयं कार्बन प्रति अलग नहीं करें। वीक्षक उत्तर-पत्रक की मूल प्रति को अपने पास जमा कर, कार्बन प्रति को मूल प्रति से कट लाइन से मोड़ कर सावधानीपूर्वक अलग कर परीक्षार्थी को सौंपेंगे, जिसे परीक्षार्थी अपने साथ ले जायेंगे। परीक्षार्थी को उत्तर-पत्रक की कार्बन प्रति प्रवेश प्रक्रिया पूर्ण होने तक सुरक्षित रखनी होगी।

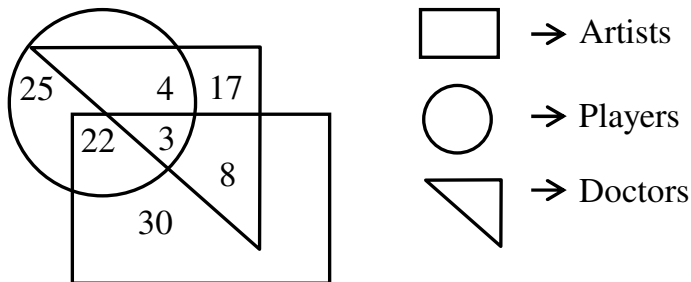
Part - A
MENTAL ABILITY

1. Introducing 'Aman', Rekha said, "His wife is the only daughter of my father". How is Aman related to Rekha?
(A) Brother-in-law (B) Husband (C) Father (D) Son-in-law
2. 'Engineer' is related to 'Production' in the same way as 'Doctor' is related to -
(A) Cure (B) Hospital (C) Body (D) Surgery
3. In a certain language DEBU is coded as 45221 and MANSI is coded as 13114199. In the same language RAJVEER is coded as -
(A) 16100225588 (B) 17111222555 (C) 18011252581 (D) 18110225518
4. If VOTER = 41352, HEATER = 743654, TEASER = 645834, then which number represents "S"?
(A) 1 (B) 5 (C) 8 (D) 7
5. Find the set among the four sets which is like the given set -
13 : 20 : 27
(A) 3 : 11 : 18 (B) 18 : 25 : 32 (C) 18 : 27 : 72 (D) 7 : 14 : 28
6. How many 7's are there in the given series which are immediately preceded by 6 but not immediately followed by 8?
3, 4, 8, 7, 6, 1, 5, 6, 7, 8, 4, 9, 6, 7, 5
(A) 1 (B) 2 (C) 3 (D) 4
7. Statements (I) and (II) are given below, read them and select the correct answer -
Statements: (I) Online shopping has increased significantly.
(II) Many local retail shops are shutting down.
(A) Statement (I) is the cause and Statement (II) is its effect.
(B) Statement (II) is the cause and Statement (I) is its effect.
(C) Both the statements (I) and (II) are independent causes.
(D) Both the statements (I) and (II) are effects of independent causes.
8. If ACE = 15 and BDF = 48, then what will be HJL?
(A) 960 (B) 710 (C) 698 (D) 250
9. What is the last letter of the word which is formed by rearranging the following letters?
C, P, A, O, E, C, K (A bird)
(A) E (B) K (C) P (D) C
10. Find the total number of squares in the given figure -



- (A) 10 (B) 14 (C) 12 (D) 16

11. Complete the following series -
5040, 720, 120, 24,, 2, 1
(A) 8 (B) 7 (C) 6 (D) 5
12. A cyber-attack hits a major city's network, crippling services.
Courses of action would be -
(I) The authorities should immediately shut down all networks.
(II) The IT team should identify and fix the vulnerability.
(A) Only (I) follows (B) Only (II) follows
(C) Neither (I) nor (II) follows (D) Both (I) and (II) follow
13. If Bittu says, "Aarti's mother is the only daughter of my mother", then how is Bittu related to Aarti?
(A) Maternal uncle (B) Paternal uncle (C) Grandfather (D) Father
14. If 'Y' says that his mother is the only daughter of X's mother, then how is 'X' is related to 'Y'?
(A) Uncle (B) Brother (C) Cousin brother (D) Maternal uncle
15. If Aprajit is Bhumi's brother and Bhumi is Chaitnaya's sister, then what is the relation of Chaitnaya to Aprajit?
(A) Brother (B) Mother (C) Father (D) Sister
16. Use the same relationship to find the second analogy of the second pair -
16 : 2 :: 256 :
(A) 4 (B) 6 (C) 5 (D) 7
17. Identify the number that fits in the given pattern -
16, 81, 256, 625, 1296,
(A) 2401 (B) 2405 (C) 2409 (D) 2415
18. Choose the best alternative -
125 : 216 :: : 512
(A) 260 (B) 300 (C) 312 (D) 343
19. Study the diagram given below and answer the following question -



How many doctors are both players and artists?

- (A) 22 (B) 8 (C) 3 (D) 30

20. Find the next term of the following series -

ADA, EHE, ILI,

- (A) JKJ (B) GJG (C) MPM (D) JHJ

21. In an MNC, 1000 employees are randomly selected. 500 like tea, 380 like coffee and 120 like both tea & coffee. Match the following -

1. How many people like only tea? (i) 760
 2. How many people like only coffee? (ii) 640
 3. How many people like neither tea nor coffee? (iii) 240
 4. How many people like only one of tea or coffee? (iv) 260
 5. How many people like at least one of the beverages? (v) 380

- (A) (1)-(i), (2)-(ii), (3)-(iii), (4)-(iv), (5)-(v) (B) (1)-(v), (2)-(iv), (3)-(iii), (4)-(ii), (5)-(i)
 (C) (1)-(ii), (2)-(iii), (3)-(i), (4)-(v), (5)-(iv) (D) (1)-(iii), (2)-(i), (3)-(ii), (4)-(iv), (5)-(v)

22. If E = 5 and BAT = 23, then MUG =

- (A) 41 (B) 53 (C) 57 (D) 62

23. Which one will replace the question mark?

A ₁	B ₅	C ₉
D ₁₃	E ₁₇	?
G ₇	H ₁₁	I ₁₅

- (A) F₂₁ (B) G₂₂ (C) H₂₃ (D) I₂₄

24. Find the next term in the following series -

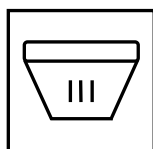
3F, 6G, 11I, 18L,

- (A) 21O (B) 25N (C) 25P (D) 27P


25. Find a pair similar to "ARROW : BOW" -

- (A) Football : Hand (B) Salad : Knife (C) Bullet : Rifle (D) Smoke : Water

26. Which option figure will come in place of the question mark?




Pot



Plant




Thread




?

(A)




Needle

(B)




Dress

(C)



Scissors

(D)



Cotton

27. Ravi said to Seeta, "Your mother is the daughter of my grandmother". How are Ravi and Seeta related to each other?

- (A) Uncle - Niece (B) Father - Daughter
(C) Cousin (D) Mother - Son

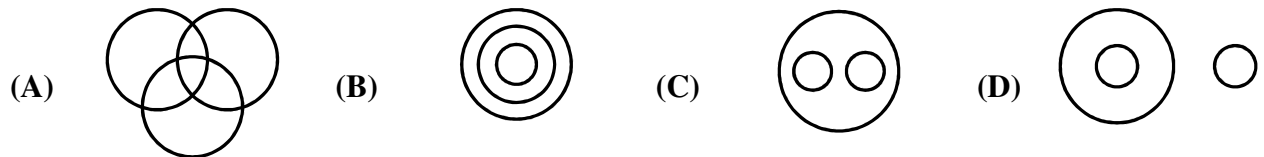
28. Introducing a boy, a girl said, "He is the son of the daughter of the father of my uncle". How is the boy related to the girl?

- (A) Sister (B) Brother (C) Sibling (D) Son

29. There are six members G, H, I, J, N, O in a family in which there are three ladies and one married couple. G is the mother of I and J is the son of I. Husband of G is H and I is his son while O is his daughter. The group of ladies include -

- (A) N, W, I (B) G, H, I (C) N, O, G (D) G, N, J

30. Which of the following diagram indicates the best relation between a teacher, a writer and an artist?



31. Find the correct alternative for the following question -

Cow : Bull :: Mare :

- (A) Animal (B) Dog (C) Horse (D) Meat

32. A clock is started at 1. By 30 minutes past 5, how many degrees has the hour hand turned through?

- (A) 115° (B) 135° (C) 140° (D) 155°

33. One morning, Hritik walks 2 km towards East, then turns right and walks 3 km, then turns left and walks 2 km. Which direction is he facing now?

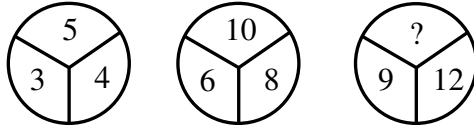
- (A) South (B) North (C) West (D) East

34. Four words have been given out of which three are alike in some manner, while the fourth one is different. Choose the odd one out -

- (A) Feeling (B) Joy (C) Anxiety (D) Anger

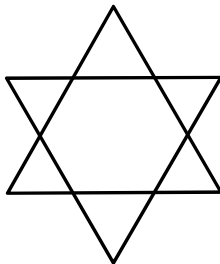
35. If 'blue' is called 'green', 'green' is called 'white', 'white' is called 'red', 'red' is called 'black', then what is the color of clear sky?
- (A) Blue (B) Green (C) White (D) Black

36. Find out the missing number -

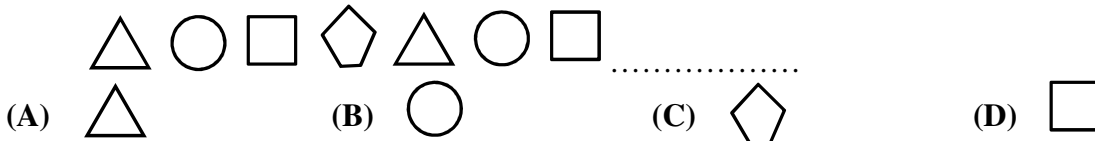


- (A) 15 (B) 18 (C) 20 (D) 13
37. The sum of ages of X, Y and Z is 45 years. What is Y's age?
- Statements:** (I) Y is 12 years older than X.
 (II) Z is 15 years old.
- (A) Only statement (I) is sufficient to answer the question.
 (B) Only statement (II) is sufficient to answer the question.
 (C) Both statements (I) and (II) are sufficient to answer the question.
 (D) Both statements (I) and (II) are insufficient to answer the question.

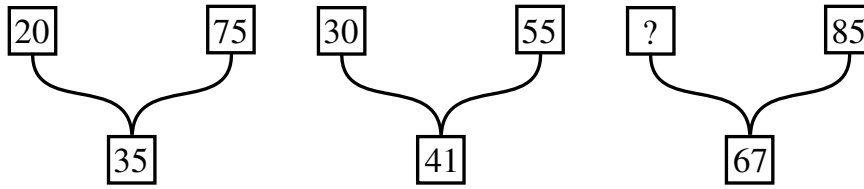
38. How many triangles are in the given figure?



- (A) 6 (B) 8 (C) 10 (D) 12
39. Find the missing term in the second group -
 AEJO : BFKP :: CGLQ :
- (A) ENSY (B) DLNP (C) DHMR (D) FMPV
40. Ajit is the father of Bhavini, who is the daughter of Chitra and Chitra is the daughter of Parul. How is Ajit related to Parul?
- (A) Son (B) Daughter (C) Son-in-law (D) Daughter-in-law
41. What will come next in the following series?



42. Insert the missing number in the following -



- (A) 35 (B) 40 (C) 45 (D) 50

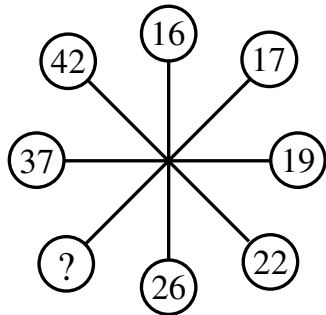
43. Choose the odd pair of words -

- (A) Cow : Calf (B) Dog : Bitch
 (C) Lion : Cub (D) Tortoise : Baby tortoise

44. A, P, R, X, S and Z are sitting in a row. S and Z are in the centre, A and P are at the ends. R is sitting to the left of A. Who is sitting to the right of P?

- (A) S (B) X (C) Z (D) R

45. In the following question, find out the missing number -



- (A) 30 (B) 25 (C) 27 (D) 31

46. Find the word that can be formed from the letters of the given word -

PRAGMATIC

- (A) GUITAR (B) AGMARK (C) GAME (D) MAGIC

47. Which of the following does not belong to the group?

- (A) ZA (B) XC (C) VE (D) MG

48. The total of the ages of P, Q and R is 90 years. What was the total of their ages five years ago?

- (A) 70 years (B) 75 years (C) 80 years (D) 85 years

49. If '+' means '×', '-' means '+', '×' means '÷' and '÷' means '-', then -

$20 + 10 \times 20 \div 4 - 10$ has a value of -

- (A) 8 (B) 16 (C) 32 (D) 17

50. Which one is different among the following?

- (A) WhatsApp (B) Skype (C) Snapchat (D) LinkedIn

Part-B
GENERAL AWARENESS OF RAJASTHAN

51. In the 'Viksit Rajasthan @2047', by the year 2029 state aims to achieve economy worth of -
(A) \$275 Billion (B) \$325 Billion
(C) \$350 Billion (D) \$450 Billion
52. Which mineral is taken out in Giral mine in Barmer and Matasukh and Kasnau mines in Nagaur?
(A) Bentonite (B) Gypsum (C) Lignite (D) Limestone
53. Among the following, which river is NOT a tributary of Chambal river?
(A) Kali Sindh (B) Banganga (C) Banas (D) Parvati
54. During 2024-25 in Rajasthan, which sector has contributed highest in 'Gross State Value Addition', at current prices?
(A) Agriculture (B) Industry (C) Infrastructure (D) Services
55. Who among the following players from Rajasthan received the Arjuna Award in the year 2025?
(A) Sakshi Kumari (B) Mona Agrawal
(C) Om Prakash Mitharwal (D) Sundar Singh Gurjar
56. Who among the following court musicians of Jaipur wrote the book named 'Swar Sagar'?
(A) Bhatt Dwarkanath (B) Devarshi Bhatt
(C) Ali Bhagwan (D) Chand Khan
57. Which goddess is worshipped in 'Sanjhi Art'?
(A) Parvati (B) Lakshmi (C) Saraswati (D) Sita
58. Identify the correct group of Fresh water lakes of Rajasthan -
(A) Pichola, Fateh Sagar, Panchbhadra (B) Jaisamand, Deedwana, Nakki
(C) Rajsamand, Siliserh, Kolayat (D) Sambhar, Lunkaransar, Ana Sagar
59. Which among the following archaeological sites of Rajasthan was excavated by the Swedish Archaeological Team during 1952-54?
(A) Rang Mahal (B) Jodhpura (C) Ganeshwar (D) Bhinmal
60. In which form, Ajmer was categorised in the First Schedule of the Constitution which commenced on 26th January, 1950?
(A) Part - A State (B) Part - B State
(C) Part - C State (D) Union Territory
61. The Shahrukh Khan starrer movie 'Paheli' was based on which of these Rajasthani writer's story?
(A) 'Duvidha' by Vijaydan Detha
(B) 'Ek Beendani Do Beend' by Nathmal Joshi
(C) 'Manjhal Raat' by Laxmi Kumari Chundawat
(D) 'Jog Sanjog' by Yadvendra Sharma Chandra
62. Identify the three places where battles were fought between Marathas and Rajput states during 1787 to 1800 on the issue of collection of Chauth -
(A) Hurda, Rajmahal, Tunga (B) Bundi, Malpura, Ajmer
(C) Tunga, Patan, Malpura (D) Bagru, Patan, Jaipur

63. To which genre of Folk-Theatre of Rajasthan, 'Turra Kalangi' is related?
 (A) Khyal (B) Tamasha (C) Rammat (D) Swang
64. The second highest peak of Aravalli Mountain Range in Rajasthan is -
 (A) Achalgarh (B) Sajjargarh (C) Jarga (D) Ser
65. In which month the Pushkar Fair is organised?
 (A) Shravan (B) Pausha (C) Kartik (D) Bhadrapad
66. Moriya, Loor, Kood, Mandal are dances of -
 (A) Garasiya (B) Bhil (C) Gurjar (D) Kalbeliya
67. Who among the following founded 'Veer Bharat Samaj'?
 (A) Jammalal Bajaj (B) Motilal Tejawat
 (C) Manikya Lal Verma (D) Vijay Singh Pathik
68. A set of twin stepwells known as 'Nagar Sagar Kund' is situated at -
 (A) Dausa (B) Bundi (C) Kota (D) Chittorgarh
69. Identify the incorrect pair of Dam and the River on which it has been constructed -
 (A) Meja Dam – Kothari River (B) Matrikundia Dam – Banas River
 (C) Nahar Sagar Dam – Nagadi River (D) Fateh Sagar Dam – Berach River
70. Which of these things from Rajasthan has NOT been given a GI (Geographical Indicator) tag?
 (A) Bikaneri Bhujia (B) Kota Doria
 (C) Blue Pottery of Jaipur (D) Rajasthan Ravan Hattha
71. Who among the following has never been the Leader of Opposition of Rajasthan Legislative Assembly?
 (A) Bhairon Singh Shekhawat (B) Haridev Joshi
 (C) Vasundhara Raje (D) Ashok Gehlot
72. Who among the following did NOT hold the office of Rajasthan's Chief Minister during the decade of 1990s (1990 to 1999)?
 (A) Hari Dev Joshi (B) Shiv Charan Mathur
 (C) Bhairon Singh Shekhawat (D) Ashok Gehlot
73. Identify the correct group of Folk-Deities in Rajasthan worshiped as the Five Peers -
 (A) Pabuji, Tejaji, Kallaji, Gogaji, Devnarayanji
 (B) Devnarayanji, Ramdevji, Harbuji, Mallinathji, Kallaji
 (C) Gogaji, Pabuji, Ramdevji, Mehaji, Harbuji
 (D) Pabuji, Mallinathji, Mehaji, Gogaji, Tejaji
74. Identify the correct group of places of Rajasthan, which were invaded by Sultan Alauddin Khilji -
 (A) Chittor, Jodhpur, Sirohi (B) Ranthambore, Chittor, Jalore
 (C) Jodhpur, Jalore, Chittor (D) Sirohi, Ranthambore, Jodhpur
75. Which present day districts came under the 'Jangladesh' in the Mahabharata period?
 (A) Bikaner - Nagaur (B) Udaipur - Jodhpur
 (C) Alwar - Jaipur (D) Alwar - Bharatpur

76. Who among the following persons has NOT been a full-time Speaker in the Rajasthan Legislative Assembly?
 (A) Narottam Lal Joshi (B) Ramkishor Vyas
 (C) Niranjana Nath Acharya (D) Gulab Chand Kataria
77. Johad, Khadin and Jhalra are methods of -
 (A) Water conservation (B) Soil conservation
 (C) Wildlife conservation (D) Seed conservation
78. Who among the following is associated with 'Eki Movement'?
 (A) Motilal Tejawat (B) Manikya Lal Verma
 (C) Naynu Ram Sharma (D) Kunj Bihari Lal Modi
79. Consider the following statements regarding 'Gindad' dance -
 (I) It is a famous folk dance of Shekhawati region.
 (II) It is performed by males only.
 (A) Only (I) is correct (B) Only (II) is correct
 (C) Both (I) and (II) are correct (D) Neither (I) nor (II) is correct
80. Which award did Pandit Vishwa Mohan Bhatt get in 1994 for his album 'A Meeting by the River'?
 (A) Sangeet Natak Akademi Award (B) Padma Shri
 (C) Grammy Award (D) Kalidas Samman
81. Identify the incorrect pair of District and Product under ODOP scheme -
 (A) Baran - Mango (B) Ajmer - Rose
 (C) Churu - Groundnut products (D) Sikar - Onion
82. Which one of the following forts is NOT located in Karauli district?
 (A) Timargarh (B) Shergarh (C) Devgiri (D) Untgiri
83. Jaisingh Suri is the writer of which of the following book?
 (A) Raj Prashasti (B) Hammir Mad Mardan
 (C) Kirtistambh Prashasti (D) Gyan Manjari
84. Which fort is built on the Songiri hills on the banks of Sukadi river?
 (A) Gagron Fort (B) Bhainsrorgarh Fort
 (C) Jalore Fort (D) Siwana Fort
85. On the second day of Holi (Dhulandi), where does the 'Badshah ki Sawari' procession take place?
 (A) Churu (B) Bhilwara (C) Bhinmal (D) Beawar
86. What is Humseedho?
 (A) Song sung by Bhils (B) Song sung by Meenas
 (C) Song sung by Manganiyars (D) Song sung by Langas
87. Among the following temples of Rajasthan, which one is NOT related to the 'Bhumij Style of Temple-Architecture'?
 (A) Mahanaleshwar, Mainal (B) Samadhishwar Mandir, Chittorgarh
 (C) Bhand Devara, Baran (D) Surya Mandir, Ranakpur
88. 'Inya Parvat' is related to whom?
 (A) Bhil (B) Garasiya (C) Meena (D) Gurjar

89. Who is the author of 'Gaon Ar Amma', a Rajasthani poetry book which won the Sahitya Akademi Award for the year 2024?
- (A) Ambika Dutt (B) Mukut Maniraj
(C) Bhanwar Singh Samour (D) Meethesh Nirmohi
90. Identify the incorrect pair of archaeological site of Rajasthan and the river nearby -
- (A) Bagor – Kothari (B) Sunari – Kantali
(C) Nagari - Berach (D) Noh – Banganga
91. Which constitutional body has been created to review the financial position of the Panchayats and make recommendations to the Governor under the 73rd Constitutional Amendment Act, 1992?
- (A) Rajasthan State Planning Board (B) State Finance Commission
(C) Panchayat Samiti (D) Zila Parishad
92. The last Rajputana state to enter into a treaty with the British was -
- (A) Udaipur (B) Kota (C) Sirohi (D) Jaisalmer
93. Consider the following statements regarding Census 2011 of Rajasthan -
- (I) Out of total population of Rajasthan, 24.9% people lived in urban area.
(II) Female Literacy Rate in Rajasthan was 60.1%.
- (A) Only (I) is correct (B) Only (II) is correct
(C) Both (I) and (II) are correct (D) Neither (I) nor (II) is correct
94. Remains of which Empire have been found in excavations done at 'Bijak ki Pahadi'?
- (A) Mauryan Empire (B) Gupta Empire (C) Chola Empire (D) Pandya Empire
95. Identify the Governor of Rajasthan during whose tenure President's Rule under Article 356 was only proclaimed, NOT revoked -
- (A) Raghukul Tilak (B) Hukum Singh
(C) M. Chenna Reddy (D) Bali Ram Bhagat
96. To which style of painting, the great painter of Rajasthan Mordhwaj Nihalchand was related?
- (A) Bikaner style (B) Jodhpur style (C) Bundi style (D) Kishangarh style
97. Which of these women freedom fighters was expelled from Bundi for her political and social reform activities?
- (A) Nagendra Bala (B) Janaki Devi Bajaj
(C) Shanta Trivedi (D) Anjana Devi Chaudhari
98. Who among the following emperor awarded the title of 'Rao' to Rajput warrior of Nagaur Amar Singh Rathore?
- (A) Akbar (B) Jahangir (C) Shah Jahan (D) Aurangzeb
99. Which of these freedom fighters was a member of Rajya Sabha from 1954 to 1960?
- (A) Balwant Singh Mehta (B) Master Adityendra
(C) Jainarayan Vyas (D) Manikya Lal Verma
100. According to the data of 2022-23, which position did Rajasthan have in Soybean production?
- (A) First (B) Second (C) Third (D) Fourth

Part-C
TEACHING APTITUDE AND ATTITUDE

- 101.** A successful teacher is one who -
(A) motivates the students for learning.
(B) completes the course before time.
(C) helps the students in preparing notes.
(D) does not believe in failing the students.
- 102.** When a teacher wants to give some information to the students, which communication skill will be used?
(A) Speaking and Writing (B) Speaking and Reading
(C) Reading and Writing (D) Speaking and Listening
- 103.** ‘Message should have all the needed information.’ This basic Principle of Communication Skill is related to which of the following?
(A) Clarity (B) Conciseness (C) Completeness (D) Concreteness
- 104.** Communication is a process of -
(A) Exchanging ideas and information (B) Giving orders
(C) Writing messages only (D) Listening only
- 105.** Which method is most suitable for value education?
(A) Lecture Method (B) Drill Method
(C) Dictation Method (D) Story-telling Method
- 106.** What does the term “Evaluation” mean?
(A) Measurement (B) Value judgement
(C) Measurement & value judgement (D) Neither measurement nor value judgement
- 107.** A person’s ability to solve problems in multiple ways, is known as -
(A) Fluency (B) Flexibility (C) Originality (D) Elaboration
- 108.** Miss Neena asked the students to explain how newspaper can be used differently. Rehan wins this game stating 15 ways in which newspaper may be used differently. Miss Neena addressed which component of creativity by this game?
(A) Fluency (B) Flexibility (C) Originality (D) Elaboration
- 109.** A student’s self-composed poem indicates which element of creativity?
(A) Originality (B) Flexibility (C) Elaboration (D) Fluency
- 110.** In the process of learning, reward is which type of incentive given by the teacher to the students?
(A) Extrinsic (B) Intrinsic (C) Biogenic (D) Physiologic
- 111.** When a student in your class does not show interest, then you will -
(A) punish him. (B) send him out of the class.
(C) try to find reason behind this. (D) will leave him to his fate.
- 112.** The role of a teacher in fostering creativity is to -
(A) Impose rules strictly (B) Provide ready-made answer
(C) Focus on memorization (D) Encourage exploration and questioning
- 113.** Which of the following method is used to receive information from the sender?
(A) Listening (B) Speaking (C) Telling (D) Writing

114. According to Educational Psychology, professional attitude affects -
 (A) Only teachers (B) Only administration
 (C) Teaching-learning process (D) School building
115. Which of the following term does NOT describe Nature of Learning?
 (A) Process (B) Product (C) Purposive (D) Continuous
116. Which of the following is the core component of professional attitude of a teacher?
 (A) Bias and belief (B) Choice and opinion
 (C) Choice and belief (D) Belief and behaviour
117. Gender bias in education leads to -
 (A) Social injustice (B) Equal opportunities
 (C) Inclusive growth (D) Balanced development
118. Professional attitude of teacher helps most in -
 (A) Maintaining discipline (B) Improving student learning
 (C) Reducing workload (D) Increasing holidays
119. Identify the kind of discipline which is most effective for inculcating social sensitivity among students.
 (A) Impressionistic discipline (B) Repressionistic discipline
 (C) Emancipationistic discipline (D) Self-discipline
120. Maintaining a positive classroom climate is the responsibility of -
 (A) Students (B) School administration
 (C) Teachers (D) Parents
121. The purpose of Formative Assessment is to -
 (A) Rank students (B) Judge final result
 (C) Increase competition (D) Improve learning process
122. The Right to Education (RTE) Act, 2009 made CCE mandatory for which classes?
 (A) Classes I to V (B) Classes VI to VIII
 (C) Classes I to VIII (D) Classes IX to XII
123. A professionally committed teacher believes that teaching is -
 (A) a job (B) a social responsibility
 (C) a source of livelihood (D) a source of power
124. Which of the following is NOT a quality of a creative child?
 (A) Intelligence (B) Dependence (C) Self-assertive (D) Original thoughts
125. A primary school teacher's professional attitude mainly reflects which quality?
 (A) Personal comfort (B) Commitment towards students
 (C) Financial benefits (D) Social status
126. Which leadership style encourages followers to recognize their potential?
 (A) Primitive leadership (B) Inspirational leadership
 (C) Transactional leadership (D) Bureaucratic leadership
127. Which of the following option describes the role of a teacher in developing social sensitivity among students?
 (A) Administrator (B) Manager (C) Checker (D) Motivator
128. Which would be the best way to develop creativity of students in the classroom?
 (A) Speech on ways to develop creativity (B) Give examples of creativity
 (C) Encourage for creative thinking (D) Hands-on activity to develop creativity

129. A student in your class generally asks unique questions, then you will -
 (A) ask him/her to keep quiet.
 (B) scold him/her for asking questions repeatedly.
 (C) recognize the creativity behind his/her unique questions.
 (D) tell him/her to meet separately.
130. Social sensitivity in teaching mainly involves -
 (A) Strict discipline (B) Understanding of learner's background
 (C) Content completion (D) Examination control
131. A democratic leader generally -
 (A) takes decision alone (B) encourages participation
 (C) maintains strict control (D) avoids responsibility
132. What would you like to do for assessing the development of affective and psychomotor aspects of your students?
 (A) Administer a Psychological test
 (B) Test them by Psychiatrist
 (C) Organise Literary, Cultural, Sports activities continuously
 (D) Administer achievement test
133. For heterogeneous and widely dispersed audience, which of the following communication type is suitable?
 (A) Interpersonal communication (B) Intrapersonal communication
 (C) Group communication (D) Mass communication
134. The term "Formative Evaluation" is concerned with -
 (A) Assessment of students in the beginning of instructions
 (B) Assessment of students during the instructional process
 (C) Assessment of students after the instructional process
 (D) Assessment of students at the end of the term
135. CCE aims at reducing -
 (A) Learning opportunities (B) Teacher's role
 (C) Examination stress (D) Student participation
136. Which of the following is NOT an element of teaching-learning process?
 (A) Teacher (B) Learner (C) Parents (D) Curriculum
137. As a classroom leader, to create a fear-free environment, you will plan your lesson in which of the following manner?
 (A) To provide information which students can learn
 (B) To engage students in discussion and enquiry
 (C) To ensure that students do self-study and learn
 (D) To deliver a lecture which students can listen
138. A teacher as a leader of a class is successful when even in his absence -
 (A) students of the class are busy talking to each other.
 (B) students are sitting quietly in class.
 (C) students are busy doing their own work.
 (D) students are busy in games.

139. Which of the following is NOT a feature of continuous evaluation in CCE?
 (A) Regular assessment (B) Frequency of unit testing
 (C) Evaluation as one-time event (D) Diagnosis of learning gaps
140. Which of the following statements is NOT correct with reference to learning?
 (A) All children are naturally motivated to learn.
 (B) Children learn in a variety of ways.
 (C) All children are capable of learning.
 (D) Learning cannot take place without mediation.
141. Social sensitivity is the ability to -
 (A) Understand the feelings and thoughts of others
 (B) Talk about others
 (C) Perceive signs of social interaction
 (D) Recognize social attitude
142. A teacher as a facilitator means -
 (A) Guiding learners in learning process (B) Giving ready-made answers
 (C) Dominating classroom (D) Limiting student's interaction
143. Social Sensitivity is -
 (A) The ability to empathize with others
 (B) The ability to understand the condition of others
 (C) Both (A) and (B)
 (D) Neither (A) nor (B)
144. Which factor negatively affects a teacher's professional attitude?
 (A) Continuous training (B) Motivation
 (C) Job dissatisfaction (D) Student participation
145. Which of the following is an essential characteristic required for an effective leader?
 (A) Power (B) Inheritance (C) Initiative (D) Position
146. Active listening means -
 (A) Hearing without response (B) Interrupting the speaker
 (C) Understanding and responding (D) Ignoring the message
147. Communication that takes place between two or more persons establishing a communicative relationship is known as -
 (A) Intrapersonal communication (B) Interpersonal communication
 (C) Public relations communication (D) Directing
148. Divergent thinking is closely related to what?
 (A) Creativity (B) Intelligence (C) Memory (D) Habit formation
149. When a teacher wants students to excel in map making, then which teaching strategy will be used for this?
 (A) Lecture (B) Demonstration (C) Drill work (D) Role play
150. Which of the following statement indicates that students are sensitive?
 (A) They have the capability to understand feelings and thoughts through Verbal expressions only.
 (B) They have the capability to understand feelings and thoughts through Non-verbal expressions only.
 (C) They have the ability to accept own self and others on the basis of their own biases.
 (D) They have the ability to understand feelings and thoughts through Verbal and Non-verbal expressions.

Part-D
LANGUAGE PROFICIENCY : ENGLISH

Read the following passage and answer the questions 151-154 -

A British survey found that 44 percent of firms, which started to use robots met with initial failure and 22 percent abandoned them altogether, mainly because of inadequate technological know-how and skills at all plant levels.

Robotisation is by and large a viable proposition. These machines can work round the clock, raise output, protect the quality and industrial competitiveness.

Certain production jobs, mostly simple or hazardous ones, are irretrievably lost to robotics. Thus, spot welders, spray painters, cleaners, machine loaders, grinding and polishing machine operators are endangered species.

- 151.** What do you mean by ‘robotisation’?
(A) Making robots (B) Marketing robots
(C) Introduction of robots (D) Replacement of humans with robots
- 152.** What does the writer say regarding initial failure?
(A) 50 percent are using robots.
(B) British companies stopped the use of robots.
(C) 22 percent have abandoned the use of robots.
(D) All of the above
- 153.** ‘A viable proposition’ is -
(A) a workable idea (B) a fanciful idea
(C) an imaginative idea (D) an endangered idea
- 154.** Robots are a substitute for -
(A) planners (B) production workers
(C) motor cars (D) endangered species
- 155.** Find out the word with correct spelling -
(A) Supperannuation (B) Superanuuation (C) Supperanuuation (D) Superannuation
- 156.** Which Connective is correct?
..... he is intelligent, he is humble.
(A) Although (B) But (C) Yet (D) As well as
- 157.** Identify the one underlined expression (A, B, C or D) that must be changed in order to correct the sentence.
None of the children wants_A to be in the group that has_B to stay inside because everyone prefer_C to go outside and play_D.
(A) A (B) B (C) C (D) D
- 158.** Find the Antonym for ‘Acquit’ -
(A) Convict (B) Disclose (C) Adjudge (D) Imprison
- 159.** Complete the following sentence –
If you answer the questions correctly.....
(A) You were the winner (B) You could be the winner
(C) You have been the winner (D) You could have been the winner

- 160.** Correct the following sentence –
If I were you, I will never give up.
(A) If I was you, I will never give up. (B) If I were you, I was never give up
(C) If I were you, I would never give up. (D) If I were you, I will never have give up.
- 161.** Which part has error in it?
Despite for her protests/I decided/to buy the saree/which she did not like.
(A) Despite for her protests (B) I decided
(C) to buy the saree (D) which she did not like
- 162.** Which of the following means ‘a middle course’?
(A) By the way (B) Through communication
(C) Via media (D) The right order
- 163.** Complete the sentence with suitable Article:
France is European country.
(A) a (B) an (C) the (D) no article
- 164.** Mark the most appropriate one-word substitution for the following -
‘Undue favour shown by a person in power to his relatives.’
(A) Misanthrope (B) Flagrant (C) Perquisition (D) Nepotism
- 165.** Put the following into indirect speech:
Rahul asked Raj, “Why have you not allowed the book to be published?”
(A) Rahul asked Raj that why have the book not been published.
(B) Rahul asked Raj why he had not allowed the book to be published.
(C) Rahul asked Raj why was the book not published.
(D) Rahul asked Raj why they have not allowed the book to be published.
- 166.** Find the Synonym for ‘Veracity’ -
(A) Audacity (B) Perfection (C) Judgement (D) Truth
- 167.** Find out the correct spelling -
(A) Variagated (B) Variegated (C) Varegated (D) Varigated
- 168.** Complete the sentence with suitable Articles.
His car struck.....tree; you can still see.....mark on.....tree.
(A) a, the, the (B) the, the, the (C) a, a, the (D) a, a, a
- 169.** Which of the following Question Tag is correct for the sentence?
We’re doing it the right way,
- (A) aren’t we? (B) are we? (C) do we? (D) don’t we?
- 170.** Choose the compound sentence -
(A) You must take rich diet to gain weight.
(B) You must take rich diet or you will not gain weight.
(C) You must take rich diet in order to gain weight.
(D) You will gain weight by taking rich diet.

भाग-द
भाषा योग्यता : हिन्दी

171. "खटाई में पड़ना" मुहावरे का अर्थ होता है –
 (A) लड़ाई में मारे जाना (B) मारे-मारे फिरना
 (C) काम होने में देरी या संदेह होना (D) साफ-साफ बात कहना
172. मुहावरे और उनके अर्थ की दृष्टि से सही विकल्प नहीं है –
 (A) नाकों चने चबाना-खूब तंग करना (B) निन्यानवे का फेर-अनुभव शून्य होना
 (C) पगड़ी उछालना-अपमान करना (D) दूज का चाँद-कठिनाई से दर्शन देना
173. "वर्षा, तुम गाना गाओ।" वाक्य किस प्रकार का है?
 (A) विधानार्थक (B) आज्ञार्थक (C) इच्छार्थक (D) संकेतार्थक
174. किस विकल्प में गलत संधि है?
 (A) तत् + लीन = तल्लीन (B) तत् + हित = तद्धित
 (C) तृष + ना = तृष्णा (D) एक + एक = एकैक
175. "चंद्रमा" का पर्यायवाची नहीं है –
 (A) हिमांशु (B) सुधांशु (C) राकेश (D) मयूख
176. 'महौषध' शब्द में कौनसी संधि है?
 (A) वृद्धि (B) गुण (C) दीर्घ (D) यण
177. इनमें से शुद्ध वाक्य है –
 (A) मैंने तुम्हारी बहुत प्रतीक्षा की। (B) मेरे को दो निबंध लिखने हैं।
 (C) हम रात में भोजन खाते हैं। (D) बालक मिठाई और दूध पीकर सो गया।
178. जिस वाक्य में दो या दो से अधिक साधारण वाक्य या प्रधान उपवाक्य या समानाधिकरण उपवाक्य, किसी संयोजक शब्द से जुड़े हों, उसे कहते हैं –
 (A) साधारण वाक्य (B) मिश्र वाक्य (C) संयुक्त वाक्य (D) संज्ञा उपवाक्य
179. "कर्कश" शब्द का विलोम शब्द है –
 (A) मधुर (B) सर्कस (C) निष्ठुर (D) कसूरवार
180. किस शब्द में "नि" उपसर्ग नहीं है?
 (A) निमग्न (B) निश्चल (C) निवारण (D) निषेध
181. "जीतने की इच्छा" कहलाती है –
 (A) लिप्सा (B) जिगीषा (C) बुभुक्षा (D) जिजीविषा
182. "तड़ाक-तड़ाग" शब्द युग्म का सही अर्थ है –
 (A) जल्दी-तालाब (B) दुर्बल-तालाब (C) जल्दी-तगड़ा (D) तालाब-जल्दी
183. इनमें से अशुद्ध शब्द कौनसा है?
 (A) महैश्वर्य (B) चक्रपाणी (C) लावण्य (D) कवयित्री
184. "थोड़ी वस्तु से बड़ा काम नहीं हो सकता।" को दर्शाने वाली लोकोक्ति है –
 (A) चूहों की मौत, बिल्ली का खेल। (B) चूहे का बच्चा बिल ही खोदता है।
 (C) चोट्टी कुतिया जलेबियों की रखवाली। (D) चूहों के चाम से कहीं नगाड़े मढ़े जाते हैं।
185. "इकतीस" शब्द में कौनसा समास है?
 (A) बहुब्रीहि (B) द्विगु (C) कर्मधारय (D) द्वन्द्व

186. "श्वेत-स्वेद" युग्म शब्दों का सही अर्थ है –
 (A) सफ़ेद-धागा (B) सफ़ेद-कान (C) सफ़ेद-पसीना (D) सफ़ेद-सभा
187. निम्न में से किस विकल्प में सभी शब्द परस्पर पर्यायवाची नहीं हैं?
 (A) माधव, दामोदर, मुकुंद (B) चपला, विशिख, विहग
 (C) नरेश, महीप, महीपति (D) आदित्य, दिवाकर, प्रभाकर
188. अशुद्ध शब्द है –
 (A) दुरावस्था (B) द्रवीभूत (C) नूपुर (D) अन्त्याक्षरी
189. "ईंट की लेनी, पत्थर की देनी" लोकोक्ति का अर्थ होता है –
 (A) जिसकी करनी उसी को फल मिलता है। (B) समय बीत जाने पर काम करना।
 (C) दुष्टता के बदले और अधिक दुष्टता। (D) जैसा व्यक्ति वैसी आवभगत।
190. इनमें से अशुद्ध वाक्य कौनसा है?
 (A) ये मेरे ही हस्ताक्षर हैं। (B) वह अपनी धुन में जा रहा था।
 (C) प्यास के मारे उसका प्राण निकल गया। (D) उसकी भुजाएँ घुटनों तक लम्बी हैं।
191. द्वंद्व समास का उदाहरण है –
 (A) नीलकंठ (B) कपड़े-लत्ते (C) त्रिभुवन (D) महाजन
192. "अभ्यागत" शब्द में कौनसा उपसर्ग है?
 (A) अभी (B) अभ्य (C) अभि (D) अ
193. "वणिग्वर्ग" शब्द में संधि है –
 (A) गुण संधि (B) अयादि संधि (C) व्यंजन संधि (D) विसर्ग संधि
194. इनमें से किस विकल्प में परस्पर विलोम शब्द नहीं हैं?
 (A) उत्कर्ष-अपकर्ष (B) उत्थान-पतन (C) उद्धत-विनीत (D) इष्ट-अभीष्ट
195. उर्दू उपसर्ग से बना शब्द है –
 (A) अधकच्चा (B) औगुन (C) सुडौल (D) बाकायदा
196. इनमें से किस विकल्प में परस्पर विलोम शब्द नहीं हैं?
 (A) अनन्त-सान्त (B) अथ-आदि (C) अग्रज-अनुज (D) अज्ञ-विज्ञ
197. निम्न में से शुद्ध वाक्य है –
 (A) बेटों में युद्ध हो गया।
 (B) इस गीत की दो-चार लड़ियाँ सुना दो।
 (C) टिड्डियों की मंडली सारी फसल चट कर गई।
 (D) गोलियों की बौछार के सामने कोई टिक न सका।
198. किस विकल्प के सभी शब्द शुद्ध हैं?
 (A) नीरोग, व्रतान्त (B) अत्युक्ति, ज्योत्स्ना (C) दुर्व्यसन, अनुगृह (D) द्वन्द, समृद्ध
199. संधि विच्छेद की दृष्टि से सही विकल्प नहीं है –
 (A) सन् + चय = संचय (B) किम् + चन = किंचन
 (C) वाक् + मय = वाङ्मय (D) षट् + मुख = षण्मुख
200. "लाघव" शब्द में प्रत्यय है –
 (A) अ (B) व (C) अक् (D) घक्

भाग—द
भाषा योग्यता : संस्कृतम्

171. 'दृश्' धातोः लोट्लकारे मध्यमपुरुष-द्विवचने रूपमस्ति –
(A) पश्यत (B) पश्यतः (C) पश्यतम् (D) पश्यथः
172. 'इत्थंभूतलक्षणे' सूत्रस्योदाहरणं वर्तते –
(A) प्रायेण याज्ञिकः (B) पुण्येन दृष्टो हरिः
(C) दण्डेन यतिः (D) नाना नार्या निष्फला लोकयात्रा
173. 'अन्तरेण' अव्ययस्य योगे विभक्तिः प्रयुज्यते –
(A) तृतीया (B) द्वितीया (C) चतुर्थी (D) पंचमी
174. 'दा' धातोः लट्लकारे प्रथमपुरुषस्य द्विवचने रूपम् अस्ति –
(A) दत्थः (B) दत्थे (C) दत्तः (D) दत्थ
175. वर्गाणां प्रथमा-तृतीय-पंचमाः यणश्च –
(A) अल्पप्राणाः (B) स्वरिताः (C) विकृताः (D) महाप्राणाः
176. अ, ए, ओ इति वर्णानां का संज्ञा?
(A) गुण-संज्ञा (B) सर्वनाम-संज्ञा (C) वृद्धि-संज्ञा (D) अपृक्त-संज्ञा
177. आधारस्य संज्ञा भवति –
(A) सम्बन्धसंज्ञा (B) अपादानसंज्ञा (C) करणसंज्ञा (D) अधिकरणसंज्ञा
178. कस्य वर्णस्य उच्चारणस्थानं दन्तोष्ठमस्ति?
(A) तकारस्य (B) वकारस्य (C) लकारस्य (D) मकारस्य
179. 'जटाभिस्तापसः' इत्यस्मिन् वाक्ये तृतीया-विधायकं सूत्रमस्ति?
(A) हेतौ (B) इत्थंभूतलक्षणे (C) येनाङ्गविकारः (D) ध्रुवमपाये
180. लिङ्गदृष्ट्या शुद्धवाक्यमस्ति –
(A) इदम् मम पुस्तकम्। (B) इयम् मम पुस्तकम्।
(C) अयम् मम पुस्तकः। (D) इदम् मम पुस्तकाः।
181. 'गवां कृष्णा बहुक्षीरा' इत्यस्मिन् उदाहरणे प्रवृत्तसूत्रमस्ति –
(A) षष्ठी हेतुप्रयोगे (B) कर्तृकर्मणोः कृति (C) यतश्च निर्धारणम् (D) क्तस्य च वर्तमाने
182. "राज्ञः पुरुषः" इत्यत्र कः सम्बन्धः?
(A) जन्यजनकभावः (B) कार्य-कारणभावः (C) स्वस्वामिभावः (D) जातिव्यक्तिभावः
183. 'रमा' शब्दस्य तृतीयाविभक्तेः एकवचने रूपं भवति –
(A) रमाया (B) रमायाः (C) रमायै (D) रमया
184. अच् प्रत्याहारे अयं वर्णः न परिगण्यते –
(A) ऋ (B) लृ (C) ह (D) उ
185. 'नृत्' धातोः लङ्लकारे मध्यमपुरुषस्य द्विवचने रूपं भवति –
(A) अनृत्येतम् (B) अनृत्यम् (C) अनृत्यत (D) अनृत्यतम्
186. "सः बालिकां पृच्छति।" इत्यस्मिन् रिक्तस्थाने उपयुक्तः शब्दः कः?
(A) इमं (B) इमे (C) इयम् (D) इमां
187. 'अन्वयः' इत्यत्र उपसर्गः वर्तते –
(A) अन् (B) अनु (C) अन्व (D) अन

188. गायकः इति पदे कः प्रत्ययः?
 (A) क्यप् (B) यत् (C) ण्वुल् (D) ण्यत्
189. 'परा + जि' धातुयोगे अपादानसंज्ञकः भवति –
 (A) ईप्सितः (B) असहयोऽर्थः (C) प्रीयमाणः (D) उत्तमर्णः
190. स्पर्शवर्णानां संख्या भवति –
 (A) 24 (B) 25 (C) 26 (D) 20
191. 'पञ्चगवम्' इति पदस्य समुचितं विग्रहवाक्यं किम्?
 (A) पञ्च गावो यस्य सः तम् (B) पञ्च गवां समाहारः
 (C) पञ्चानां गवानां समाहारः (D) पञ्चानां गवां समाहारः
192. अधस्तनेषु "रोगमुक्तः" इत्यस्मिन् पदे प्रयुक्तसमासस्य नाम किम्?
 (A) तृतीया-तत्पुरुषः (B) चतुर्थी-तत्पुरुषः (C) पंचमी-तत्पुरुषः (D) सप्तमी-तत्पुरुषः
193. 'स्था' धातोः लोट्लकारे मध्यमपुरुषबहुवचने रूपं भवति –
 (A) तिष्ठतः (B) तिष्ठथः (C) तिष्ठथ (D) तिष्ठत
194. 'स्था' धातोः विधिलिङ्ग-लकारे मध्यमपुरुषे बहुवचने रूपं भवति?
 (A) तिष्ठेयम् (B) तिष्ठेव (C) तिष्ठेयुः (D) तिष्ठेत
195. 'अस्' धातोः लङ्लकारे प्रथमपुरुषैकवचने रूपं स्यात् –
 (A) अस्तु (B) भविष्यति (C) अस्ति (D) आसीत्
196. 'धीमान्' इत्यस्मिन् पदे प्रकृतिप्रत्ययौ स्तः –
 (A) धी + मतुप् (B) धी + क्तवतु (C) धी + शानच् (D) धी + शतृ
197. 'आत्मा' इति शब्दस्य किं लिङ्गम्?
 (A) पुलिङ्गम् (B) स्त्रीलिङ्गम् (C) उभयलिङ्गम् (D) नपुंसकलिङ्गम्
198. निषेधार्थकस्य 'अलम्' इति पदस्य योगे विभक्तिर्भवति –
 (A) द्वितीया (B) चतुर्थी (C) तृतीया (D) पंचमी
199. "देवैश्वर्यम्" पदस्य सन्धिविच्छेदः निर्णयः –
 (A) देव + ऐश्वर्यम् (B) देवी + ऐश्वर्यम् (C) देव + ऐश्वर्यम् (D) देवी + ऐश्वर्यम्
200. 'राम' शब्दस्य रूपं नास्ति –
 (A) रामैः (B) रामेण (C) रामानाम् (D) रामयोः

रफ कार्य के लिए जगह / Space for Rough Work

रफ कार्य के लिए जगह / Space for Rough Work